

Name: _____

Class- I

Roll No: _____

Date: _____/12/2022

Teacher's Sign: _____

Important Instructions


1. All the worksheets will be discussed in the classroom, post winter break.
2. Encourage your ward to do the worksheets on his/ her own. If required, please give parental assistance.

Fact Family - Addition & Subtraction

Sheet 1

Count the pips on each part of the domino. Add them to find the sum. Write four different facts for each domino.

1)




$$\underline{\quad} + \underline{\quad} = \underline{\quad}$$

$$\underline{\quad} + \underline{\quad} = \underline{\quad}$$

$$\underline{\quad} - \underline{\quad} = \underline{\quad}$$

$$\underline{\quad} - \underline{\quad} = \underline{\quad}$$

2)




$$\underline{\quad} + \underline{\quad} = \underline{\quad}$$

$$\underline{\quad} + \underline{\quad} = \underline{\quad}$$

$$\underline{\quad} - \underline{\quad} = \underline{\quad}$$

$$\underline{\quad} - \underline{\quad} = \underline{\quad}$$

3)




$$\underline{\quad} + \underline{\quad} = \underline{\quad}$$

$$\underline{\quad} + \underline{\quad} = \underline{\quad}$$

$$\underline{\quad} - \underline{\quad} = \underline{\quad}$$

$$\underline{\quad} - \underline{\quad} = \underline{\quad}$$

4)




$$\underline{\quad} + \underline{\quad} = \underline{\quad}$$

$$\underline{\quad} + \underline{\quad} = \underline{\quad}$$

$$\underline{\quad} - \underline{\quad} = \underline{\quad}$$

$$\underline{\quad} - \underline{\quad} = \underline{\quad}$$

5)




$$\underline{\quad} + \underline{\quad} = \underline{\quad}$$

$$\underline{\quad} + \underline{\quad} = \underline{\quad}$$

$$\underline{\quad} - \underline{\quad} = \underline{\quad}$$

$$\underline{\quad} - \underline{\quad} = \underline{\quad}$$

6)



$$\underline{\quad} + \underline{\quad} = \underline{\quad}$$

$$\underline{\quad} + \underline{\quad} = \underline{\quad}$$

$$\underline{\quad} - \underline{\quad} = \underline{\quad}$$

$$\underline{\quad} - \underline{\quad} = \underline{\quad}$$

WRITE THE NUMBERS THAT COMES AFTER



WRITE THE NUMBERS THAT COMES BEFORE



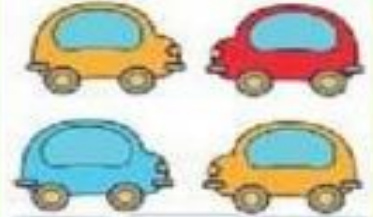
How many..?



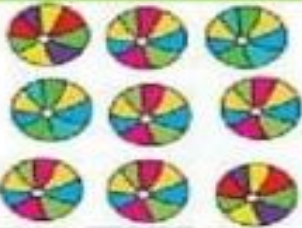
4 3 5



2 7 4



6 11 4



10 8 9



9 8 11




7 3 1



4 8 9



5 7 6



2 3 4



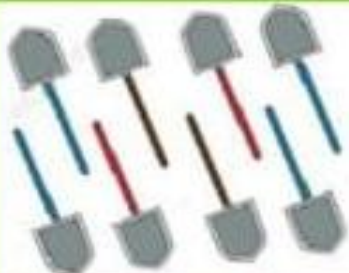
1 3 5



10 8 12



9 11 7



10 8 9



9 8 12



7 3 1

Count the objects in each group. Write the addends in the box below the objects. Write the sum in the last box.



+



=



+



=



+



=



+







=

Count and Add up to 20



Name: _____ Score: _____

1)  +  =

2)  +  =

3)  +  =

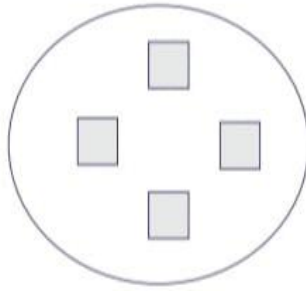
4)  +  =

5)  +  =

6)  +  =

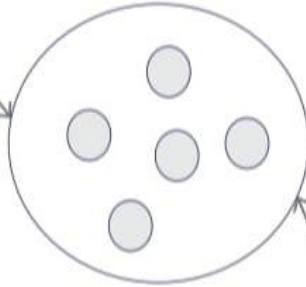
1 Subtract and match. One has been done for you.

(a) $8 - 3$



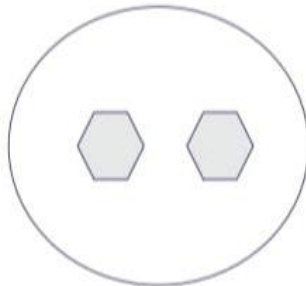
(i) $5 - 3$

(b) $7 - 1$



(ii) $7 - 3$

(c) $5 - 1$



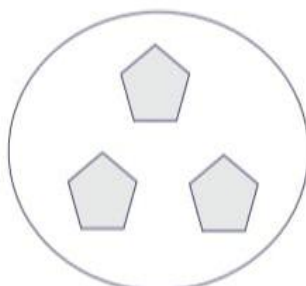
(iii) $4 - 1$

(d) $9 - 2$



(iv) $7 - 2$

(e) $4 - 2$



(v) $7 - 0$

(f) $6 - 3$



(vi) $9 - 3$

2 Subtract and write.

$$\begin{array}{r} 6 \\ - 4 \\ \hline \\ \end{array}$$

$$\begin{array}{r} 4 \\ - 3 \\ \hline \\ \end{array}$$

$$\begin{array}{r} 3 \\ - 1 \\ \hline \\ \end{array}$$

$$\begin{array}{r} 5 \\ - 2 \\ \hline \\ \end{array}$$

$$\begin{array}{r} 8 \\ - 6 \\ \hline \\ \end{array}$$

$$\begin{array}{r} 6 \\ - 5 \\ \hline \\ \end{array}$$

$$\begin{array}{r} 7 \\ - 2 \\ \hline \\ \end{array}$$

$$\begin{array}{r} 4 \\ - 1 \\ \hline \\ \end{array}$$

$$\begin{array}{r} 5 \\ - 4 \\ \hline \\ \end{array}$$

$$\begin{array}{r} 2 \\ - 1 \\ \hline \\ \end{array}$$

$$\begin{array}{r} 7 \\ - 7 \\ \hline \\ \end{array}$$

$$\begin{array}{r} 6 \\ - 3 \\ \hline \\ \end{array}$$

$$\begin{array}{r} 2 \\ - 0 \\ \hline \\ \end{array}$$

$$\begin{array}{r} 8 \\ - 4 \\ \hline \\ \end{array}$$

$$\begin{array}{r} 4 \\ - 3 \\ \hline \\ \end{array}$$

$$\begin{array}{r} 5 \\ - 4 \\ \hline \\ \end{array}$$

2 Write the missing number.

(a) $\square - 4 = 1$

(b) $6 - \square = 3$

(c) $7 - 2 = \square$

(d) $\square - 1 = 7$

(e) $8 - \square = 2$

(f) $7 - 3 = \square$

Q.1. Answer in one word.

1. Which festival are Rachit and Kriti celebrating? _____
2. Where were Rachit and his sister Kriti standing ? _____
3. What does Rachit and Kriti's mother make every Holi? _____
4. What are not present in natural colours table? _____

Q.2. Write four sentences about yourself.

- A) _____.
- B) _____.
- C) _____.
- D) _____.

Q.3. Tick the correct answer.

1. Cats sleep on _____.
A. any bed, any mat B. any table, any chair
2. Cats sleep on top of a _____.
A. cardboard box B. piano
3. Cats sleep in an empty _____.
A. shoe B. lap
4. Who lives in den?
A. dog B. lion C. cat
5. Who lives in a coop?
A. rabbit B. cow C. hen

Q.4. Underline the correct animal sound.

A. I am an owl. I croak/ hoot/ moo.

B. I am a sheep. I chatter/ bleat/ screech.

C. I am a dog. I bark/ roar/ growl.

D. I am a bee. I gobble/ buzz/ bark.

Q.5. Fill in the blanks.

1. Cats sleep on _____ of a piano.

2. Cats sleep on the _____ of a window-ledge.

3. Cats sleep in an _____ drawer.

4. Cats sleep in anybody's _____.

5. Cats don't _____! They sleep anywhere.

Q.6. Fill in the blanks with e and es.

1. One balloon; many _____.

2. One dish; many _____.

3. One brush; many _____.

4. One flower; many _____.

5. One Kiss; many _____.

Q.7. Match these flowers to their colours.

1. rose	a. pink
2. marigold	b. red
3. tulip	c. orange
4. poppy	d. white
5. jasmine	e. yellow

Q.8. Make any five words using the letters given below.

G	B	O	W	L	U	F
---	---	---	---	---	---	---

A. _____

B. _____

C. _____

D. _____

E. _____

Q.9. Match the opposites of these words.

1. ugly	a. safe
2. dry	b. dirty
3. clean	c. beautiful
4. harmful	d. wet

Q.10. Circle the words that rhyme with the given word.

1. pen	hen	net	key	men
2. skate	egg	cup	plate	gate
3. well	bag	shell	bell	spoon
4. boat	rat	coat	goat	bear