



Important Instructions

1. The worksheets given below need to be done in respective subject notebooks to be done in math notebook .
2. All the worksheets will be discussed in the classroom, post winter break.
3. Encourage your ward to do the worksheets on his/ her own.
If required, please give parental assistance.

Name: _____ **Subject: English** **Roll No: __**

Class-II **Date-** _____ **Teacher's Sign:** _____

Read the given paragraph and answer the questions that follow:

My neighbour's name is Sachin. He is seven years old. I love him very much. He plays football with me every day. When I ride a bicycle, he sits on the carrier. He likes chocolates and I like biscuits. He has a sister whose name is Misti. Misti studies in class third. She is a brave girl. We all study in the same school. Sumit sir teaches Hindi in my and Misti's class but not in Sachin's class. Sumit sir teaches History in Sachin's class. His way of teaching is amazing. When he teaches, all the children study diligently.

1. What is the name of Sachin's sister?

2. What subjects does Sumit sir teach?

3. In which class does Misti study?

4. What does Sachin like?

5. Which subject does Sumit sir teach in Sachin's class?

A. Write a descriptive writing about your favourite fruit.

Step 1: Give Title- My Favourite Fruit

Step 2: Use name, size, colour, use describing words for your favourite fruit.





Step 3: Why do you like it?

Step-4: Concluding line







≧ACTION VERBS≦

Instructions: Use the verbs on the box to name the given pictures.

cook	brush	fly	sleep
			

Instructions: Choose the action verb that completes the sentence according to the picture.

1. Fernando likes to _____ pizza.	
2. My friends _____ together.	
3. Elisa can _____ a bike.	
4. Pablo can _____ very fast.	

HOLIDAY WORKSHEET

Name: _____

Subject: Mathematics

Roll No: _____

Class-II

Date _____

Teacher's Sign: _____

$$\begin{array}{r} 1) \quad 4728 \\ + 1309 \\ + 5276 \\ \hline \end{array}$$

$$\begin{array}{r} 2) \quad 8144 \\ + 892 \\ + 3168 \\ \hline \end{array}$$

$$\begin{array}{r} 3) \quad 4075 \\ + 5218 \\ + 693 \\ \hline \end{array}$$

$$\begin{array}{r} 4) \quad 6481 \\ + 7008 \\ + 5216 \\ \hline \end{array}$$

$$\begin{array}{r} 5) \quad 7946 \\ + 3253 \\ + 7425 \\ \hline \end{array}$$

$$\begin{array}{r} 6) \quad 7906 \\ + 683 \\ + 4218 \\ \hline \end{array}$$

$$\begin{array}{r} 7) \quad 980 \\ + 8456 \\ + 7429 \\ \hline \end{array}$$

$$\begin{array}{r} 8) \quad 4107 \\ + 8563 \\ + 4912 \\ \hline \end{array}$$

$$\begin{array}{r} 9) \quad 7411 \\ + 8096 \\ + 5675 \\ \hline \end{array}$$

$$\begin{array}{r} 10) \quad 8427 \\ + 891 \\ + 183 \\ + 7415 \\ \hline \end{array}$$

$$\begin{array}{r} 11) \quad 6905 \\ + 478 \\ + 3169 \\ + 481 \\ \hline \end{array}$$

$$\begin{array}{r} 12) \quad 5618 \\ + 792 \\ + 8215 \\ + 7952 \\ \hline \end{array}$$

Name: _____

Subject: Mathematics

Roll No: _____

Class-II

Date _____

Teacher's Sign: _____

Addition and Subtraction Word Problems Worksheets

Q.1) Sandra has 53 roses and 98 tulips in her garden. How many flowers are there in her garden?



Q.2) There were 639 people in a train. 304 people got down at a station. How many people are left in the train?

Q.3) Thomas had \$387. He bought some grocery for \$159. How much money is left with him?

Q.4) There are 38,466 men, 40,000 women and 8500 children in a town. What is the population of the town?

Q.5) Joseph borrowed 25 books from the library in the month of April and 27 books in May. How many books did he borrow in these two months?

